



Additional Assessment Materials
Summer 2021

Pearson Edexcel GCSE in Biology (1BI0)
Foundation

Resource Set Topic 9: Ecosystems and
Material Cycles

Questions

(Public release version)

Pearson: helping people progress, everywhere

Pearson aspires to be the world's leading learning company. Our aim is to help everyone progress in their lives through education. We believe in every kind of learning, for all kinds of people, wherever they are in the world. We've been involved in education for over 150 years, and by working across 70 countries, in 100 languages, we have built an international reputation for our commitment to high standards and raising achievement through innovation in education. Find out more about how we can help you and your students at: www.pearson.com/uk

General guidance to Additional Assessment Materials for use in 2021

Context

- Additional Assessment Materials are being produced for GCSE, AS and A levels (with the exception of Art and Design).
- The Additional Assessment Materials presented in this booklet are an **optional** part of the range of evidence teachers may use when deciding on a candidate's grade.
- 2021 Additional Assessment Materials have been drawn from previous examination materials, namely past papers.
- Additional Assessment Materials have come from past papers both published (those materials available publicly) and unpublished (those currently under padlock to our centres) presented in a different format to allow teachers to adapt them for use with candidate.

Purpose

- The purpose of this resource to provide qualification-specific sets/groups of questions covering the knowledge, skills and understanding relevant to this Pearson qualification.
- This document should be used in conjunction with the mapping guidance which will map content and/or skills covered within each set of questions.
- These materials are only intended to support the summer 2021 series.

3 The effect of temperature on decomposition was investigated.

30 leaves were collected.

The mass of five leaves was recorded and the leaves were placed into a net bag.

This was repeated five more times.

Figure 5 shows one of these bags.

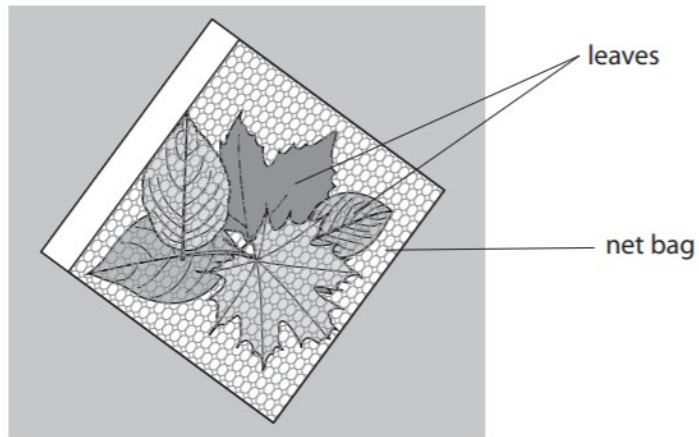


Figure 5

The net bags were then put in trays and covered in soil as shown in Figure 6.

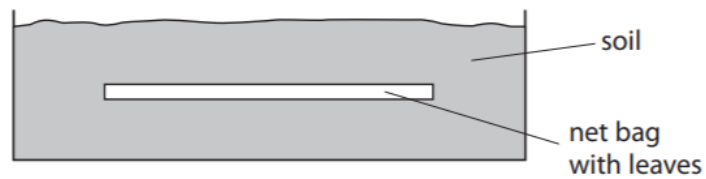


Figure 6

(a) Which type of tray should be used so that the leaves are in the best conditions for decomposition?

(1)

- A tray with air holes and dry soil
- B airtight tray with dry soil
- C tray with air holes and moist soil
- D airtight tray with moist soil

(b) Each tray was kept at a different temperature.

The mass of the leaves was recorded again after 25 days.

Figure 7 shows the results of this investigation.

temperature in °C	mass of leaves in g		decrease in mass in g	percentage decrease in mass (%)
	at start	after 25 days		
10	5.3	4.9	0.4	7.5
25	4.9	4.2	0.7	14
40	5.2	4.0	1.2	23
55	4.8	3.2	1.6	33
70	5.0	3.7	1.3	26
85	5.4	5.2	0.2	?

Figure 7

(i) Calculate the percentage decrease in mass for the leaves at 85 °C.

Give your answer to two significant figures.

(2)

.....%

(ii) Explain which temperature was the best for the decomposition of the leaves.

(2)

.....

.....

.....

.....

(iii) State **two** improvements to the method for this investigation.

(2)

1.....

.....

2.....

.....

4 (a) Plants use nitrate ions to make proteins and chlorophyll.

(i) What effects will a low nitrate ion concentration in soils have on plants?

(1)

- A reduced growth and darker green leaves
- B reduced growth and lighter green leaves
- C increased growth and darker green leaves
- D increased growth and lighter green leaves

(ii) Which organisms convert nitrogen to nitrate ions during the nitrogen cycle?

(1)

- A bacteria
- B mammals
- C fungi
- D worms

(c) Algae are green plants.

Figure 10 shows the number of algae in a lake in the United Kingdom during one year.

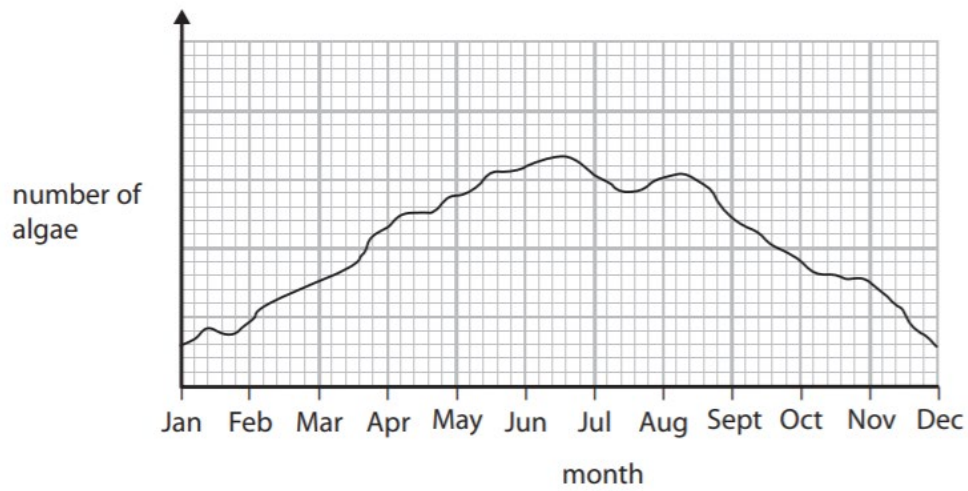


Figure 10

Explain the changes in the number of algae in the lake from February to June.

(3)

.....

.....

.....

.....

.....

.....

.....

5 Figure 11 shows a British glow-worm.



© Dom Greves Digital

Figure 11

Read the following extract before answering the questions.

Female glow-worms produce bright lights in the summer to attract males. Glow-worm larvae are predators of slugs and snails, but adult glow-worms do not feed. Females only have a few weeks to attract a mate and lay eggs, before the females die.

(a) What will happen if the population of snails decreases?

(1)

- A** the population of glow-worms will increase
- B** adult glow-worms will eat more snails
- C** glow-worm larvae will eat more slugs
- D** adult female glow-worms will glow more brightly

(b) Female glow-worms have an enzyme called luciferase.

The glow is produced when this enzyme catalyses a reaction between oxygen and a protein.

A scientist devised a plan to investigate the effect of oxygen concentration on this reaction.

The scientist had:

- five flasks of water each with a different concentration of dissolved oxygen
- a solution of the protein
- a solution of the enzyme.

The first step of this plan is:

Step 1. Add some of the protein solution to each of the five flasks.

(i) Describe the next **two** steps that should be in this plan to obtain results for this investigation.

(2)

Step 2.....

.....

Step 3.....

.....

(ii) Which procedure would improve the investigation?

(1)

- A** change the concentration of the protein solution in each flask
- B** change the volume of the protein solution added to each flask
- C** keep the concentration of dissolved oxygen the same in each flask
- D** keep the volume of each solution the same in each flask

(iii) The enzyme luciferase works best at pH8.

Explain why the activity of the enzyme decreases at pH5.

(2)

.....

.....

.....

.....

.....

(c) Female glow-worms are found attached to grass plants in a large field.

(i) Describe a sampling technique to find the **mean** number of female glow-worms in 1 m² of the field.

(3)

.....

.....

.....

.....

.....

.....

(ii) The mean number of female glow-worms in 1 m² of the field is 5.

The field has a total area of 800 m².

Estimate the number of female glow-worms in the whole field.

(1)

.....

10 Since 2003, in France, people have been buying Siberian chipmunks as pets but then releasing them into the wild when they are no longer wanted.

They are now classified as an invasive species.

Figure 25 shows a Siberian chipmunk (*Tamias sibiricus*).



© 2011, Søren Brøndum Christensen

Figure 25

(a) Siberian chipmunks eat acorns, which are the seeds of oak trees.

In Siberia, the natural predators of Siberian chipmunks are wild dogs.


(i) Figure 26 shows the biomass of three organisms in a food chain from one area of Siberia.

organisms	biomass in kg
acorns	20 650
chipmunks	2 200
wild dogs	230

Figure 26

Draw a pyramid of biomass for this food chain.

(2)



(ii) In France, Siberian chipmunks have very few natural predators.

Describe how this affected the Siberian chipmunk population in France.

(2)

(iii) The percentage of energy transferred from the acorns to the chipmunks is 9.5%.

The energy contained in the acorns is 97 500 kJ.

Calculate the amount of energy transferred to the chipmunks.

Give your answer to the nearest whole number.

(3)

.....kJ

(b) The black-legged tick (*Ixodes scapularis*) is a parasite that feeds on the blood of animals including Siberian chipmunks and humans.

The tick transmits the Lyme disease pathogen.

Figure 27 shows the number of cases of Lyme disease in humans in France in 2003 and 2015.

Number of cases of Lyme disease in humans in France	
2003	2015
9 500	27 000

Figure 27

(i) Calculate the percentage increase in the number of cases of Lyme disease in humans in France from 2003 to 2015.

(2)

.....%

(ii) Explain why there has been an increase in the number of cases of Lyme disease in humans in France.

(2)

1 (a) Figure 1 shows the water cycle.

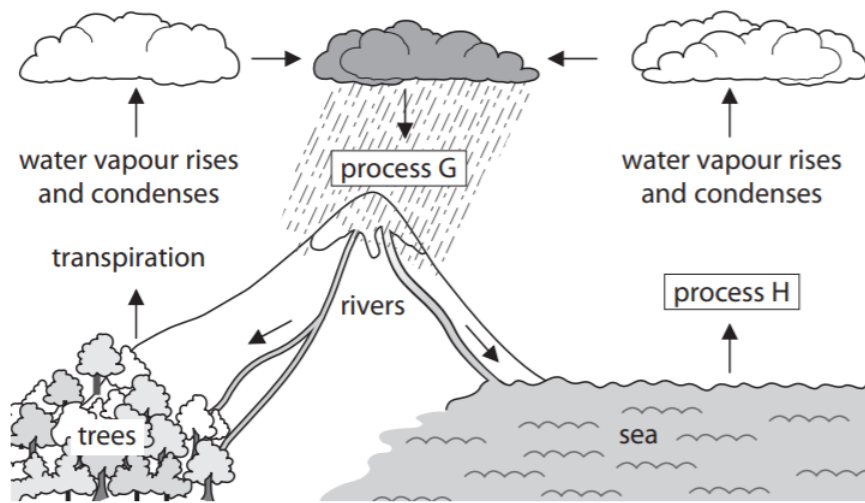


Figure 1

(i) Name process G and process H.

(2)

process G

process H

(ii) What causes the water vapour to condense and form clouds?

(1)

- A the water vapour cools down
- B the water vapour heats up
- C the temperature of the water vapour stays the same
- D the trees absorb more water

(b) Water from rivers is treated before it is safe to drink.

Use words from the box to complete the sentences.

(2)

filtering	fish	heating
mud	pathogens	stirring

During water treatment, the solids in river water are removed by

Chlorine is then added to the water to kill

(c) Figure 2 shows the Canary Islands.

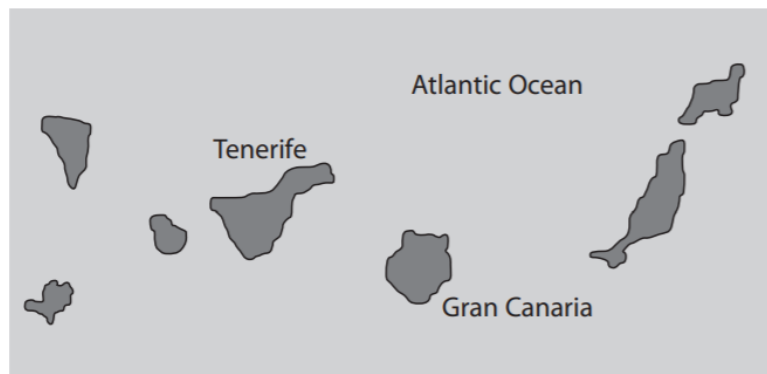


Figure 2

The Canary Islands do not have enough fresh water.

Describe how seawater can be turned into drinking water.

(2)

.....

.....

.....

.....

5 Figure 8 shows an area of nettle plants.



(Source: © stevemart/Shutterstock)

Figure 8

Grass does not grow among the nettles.

(a) Explain why grass does not grow where there are nettles.

(2)

(b) Figure 9 shows caterpillars eating nettle leaves.



(Source: © bbbb/Shutterstock)

Figure 9

A caterpillar has a body mass of 6.0 grams.
One week later, its body mass had increased to 7.5 grams.
Caterpillars convert 10% of food eaten into body mass.

(i) Calculate the mass of nettles that the caterpillar ate.

(2)

..... grams

7 The increasing human population is affecting farming and the habitats of animals.

Figure 12 shows the human population of the UK from 1960 to 2018.

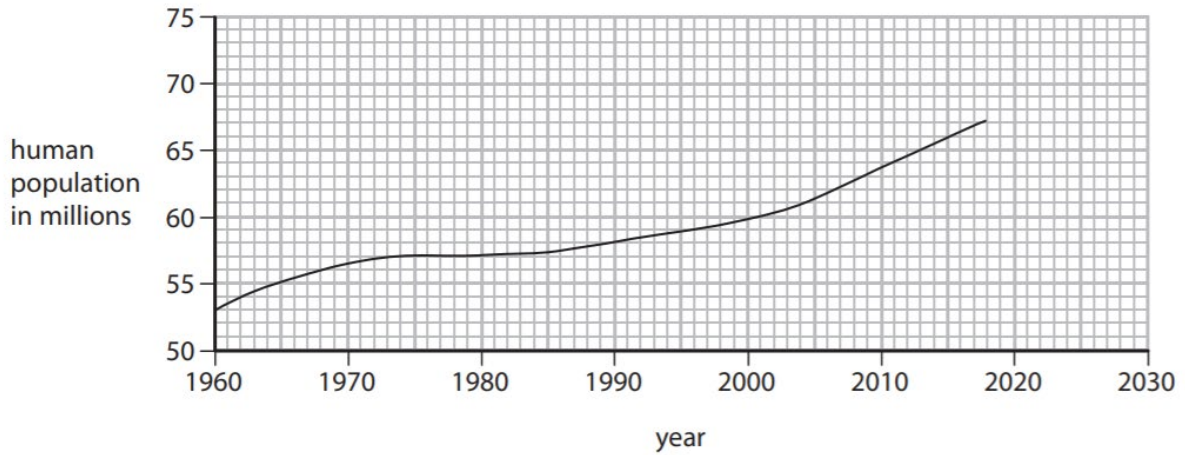


Figure 12

(a) Extend the line to estimate the human population of the UK in 2030 if this trend continues. (1)

..... million

(b) Food security means that a population has enough safe and healthy food.

Which of these would improve food security?

(1)

- A increased reforestation
- B increased animal farming
- C increased human population
- D increased crop yield

(c) A scientist tested three samples of different foods.

Figure 13 shows the results.

food sample	result of adding iodine solution	result of boiling with Benedict's solution	result of adding Biuret solution	result of emulsion test
E	black	blue	blue	clear
F	brown	orange	purple	clear
G	brown	orange	purple	cloudy

Figure 13

(i) Name the food group in sample E.

(1)

.....

(ii) Name the food groups in sample F.

(1)

.....

(iii) The emulsion test shows that food sample G contained fat.
Describe how fat is digested in the body.

(2)

.....
.....
.....
.....
.....

8 (a) A student was investigating the populations of organisms in a garden.

Figure 15 shows the estimates of the number and biomass of some of the organisms in the garden.

organism	number	mean biomass of each organism in grams	biomass of population in grams
cabbages (plants)	80	70	5600
earthworms	620	3.4	?
slugs	30	4.1	123
hedgehogs	1	620	620
squirrels	2	600	1200

Figure 15

(i) Calculate the biomass of the population of earthworms in the garden.

(1)

(ii) Hedgehogs eat slugs and earthworms.
Slug pellets were used to kill the slugs.

Explain how killing the slugs would affect the population of earthworms in this garden.

(2)

.....

.....

.....

.....

.....

(iii) Describe a method that could be used to estimate the population of slugs in the garden.

(3)

(b) Explain how cabbages, earthworms and squirrels contribute to the carbon cycle.

(3)

(c) State **three** ways the concentration of nitrates in soil can be increased.

(3)

1

2

3

2 The animal shown in Figure 3 is a tick burrowing into the skin of a human.



© IanRedding/Shutterstock

Figure 3

(a) Use words from the box to complete the sentences.

(2)

enzymes	food	herbivores
parasites	producers	prey

(i) The tick burrows into the skin to obtain

(ii) When a tick burrows into human skin the tick benefits but the human is harmed.

This means that ticks are classed as

(b) When skin is cut a blood clot forms.

Which part of the blood starts the clotting process?

(1)

- A red blood cells
- B water
- C platelets
- D white blood cells

(c) Figure 4 shows a bird called an oxpecker eating ticks that are living on a zebra.



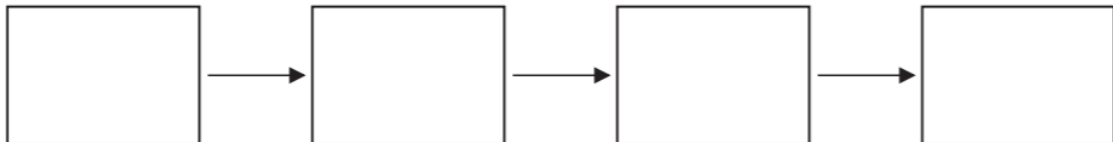
© MartinMaritz/Shutterstock

Figure 4

(i) Name the type of relationship where both the oxpecker and the zebra benefit. (1)

(ii) Zebras eat grass.

Complete the food chain that includes zebras, ticks, oxpeckers and grass. (2)



(d) Figure 5 shows the maximum numbers of oxpeckers observed on four types of mammal.

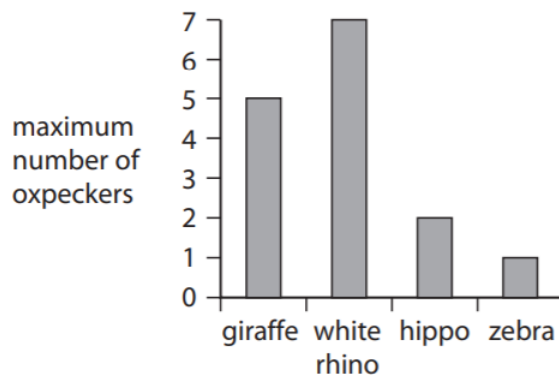


Figure 5

(i) Describe the difference in the maximum number of oxpeckers on the white rhino and on the hippo.

(2)

(ii) Give **one** reason why more oxpeckers were observed on giraffes than on zebras.

(1)

(b) Figure 7 shows fungus growing on strawberries.

The fungus is decomposing the strawberries.



© Catherine Eckert/Shutterstock

Figure 7

A scientist investigated the effect of temperature on the decomposition of strawberries.

The scientist spread fresh strawberries on six trays.

Each tray was kept at a different temperature.

After five days the scientist measured the area of fungus that had grown on each tray of strawberries.

The results are shown in Figure 8.

temperature in °C	area of fungus after 5 days in cm ²
5	8
10	25
15	36
20	48
25	60
30	72

Figure 8

(i) The mean rate of growth of fungus at 25 °C was 12 cm² per day.

Calculate the mean rate of growth of fungus at 30 °C.

(2)

..... cm² per day

(ii) State the effect of temperature on the growth of fungus on strawberries from 5 °C to 30 °C.

(1)

.....

.....

(c) Decomposition of strawberries can be prevented by boiling the strawberries with sugar to make jam.

(i) Enzymes in the fungus caused decomposition.

Explain how boiling stops the enzymes from working.

(2)

.....

.....

.....

.....

.....

(ii) Cells from a fungus can land on jam.

The sugar solution inside the jam is more concentrated than the sugar solution inside the fungus cells.

State how osmosis causes the fungus cells to die.

(1)

.....

.....

.....

.....

4 A scientist investigated the distribution of invertebrates found in a garden.

(a) Figure 9 shows an invertebrate about to fall into a pitfall trap.

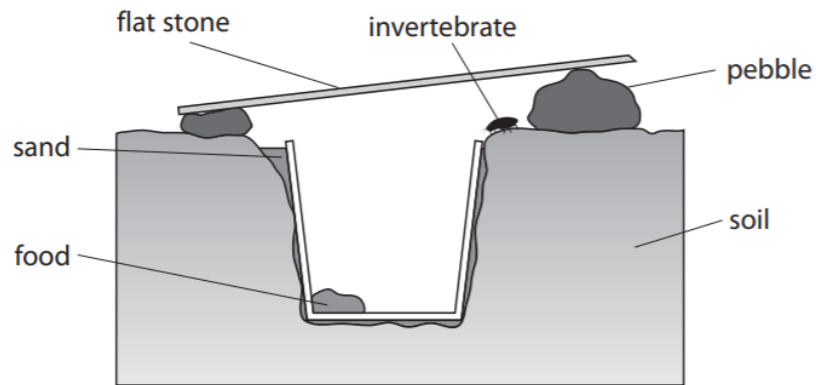


Figure 9

The steps the scientist used to set up the pitfall trap are shown below.

The steps are not in the correct order.

1. put some sand around the beaker
2. put a beaker, baited with food, in the hole
3. place a flat stone on pebbles over the beaker
4. check the pitfall trap each day
5. dig a hole in the garden


Complete the steps in the correct order, from left to right.

The first number has been written in for you.

(2)

5				
---	--	--	--	--

(b) Figure 10 shows 30 invertebrates that the scientist collected.









key					
					
beetle	snail	ant	spider	slug	worm

Figure 10

(i) Complete the table by filling in the tally and number for the spiders and worms.

(2)

invertebrate	tally	number of invertebrates
ant		6
beetle		10
slug		2
snail		3
spider		
worm		

(ii) The scientist selected an invertebrate at random to observe it in more detail.

State the probability that the invertebrate selected is an ant.

Give your answer in its simplest form.

(2)

.....
(iii) State how the type of food used to bait the pitfall trap could affect the number of different invertebrates caught.

(1)

.....
.....

(c) The scientist also counted the number of snails in four 1m^2 areas of the garden.

The garden had a total area of 40m^2 .

Describe how the scientist can use this information to estimate the number of snails in the garden.

(2)

.....
.....
.....
.....
.....

8.

(ii) Explain how the water lilies will affect the biodiversity of this lake.

(3)

.....

.....

.....

.....

.....

.....

.....

.....

10 Figure 24 shows the world human population from 1800 to 2015.

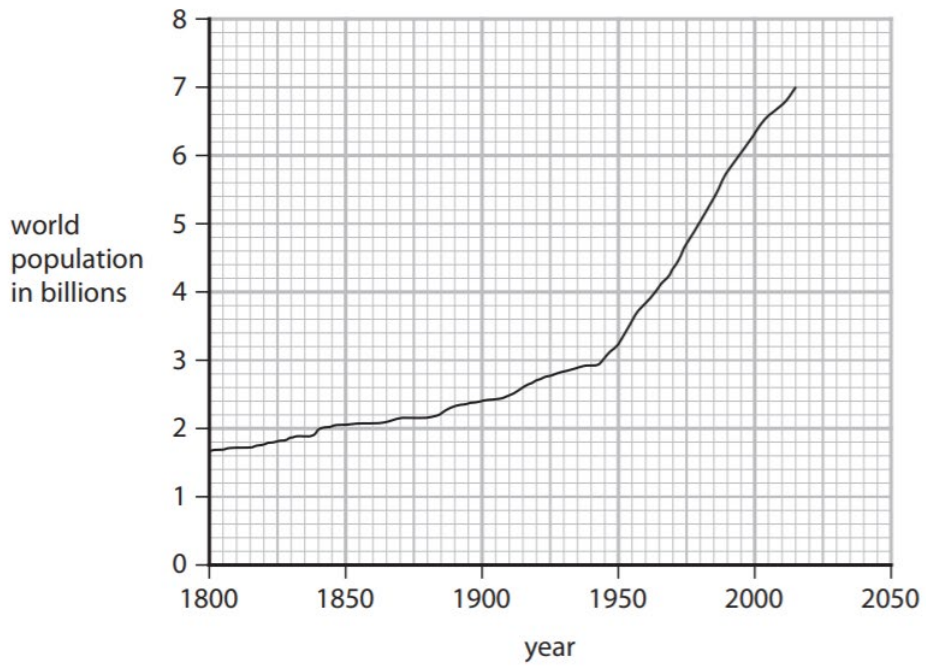


Figure 24

(a) In 2015, 13% of the world human population were classified as malnourished.

Calculate, using Figure 24, how many people were classified as malnourished in 2015.

(2)

..... billion

(b) Protein is an important nutrient in meat.

Describe the laboratory test for protein.

(2)

.....

.....

.....

.....

.....

(c) Figure 25 shows the mass of meat eaten in the world from 1980 to 2010.

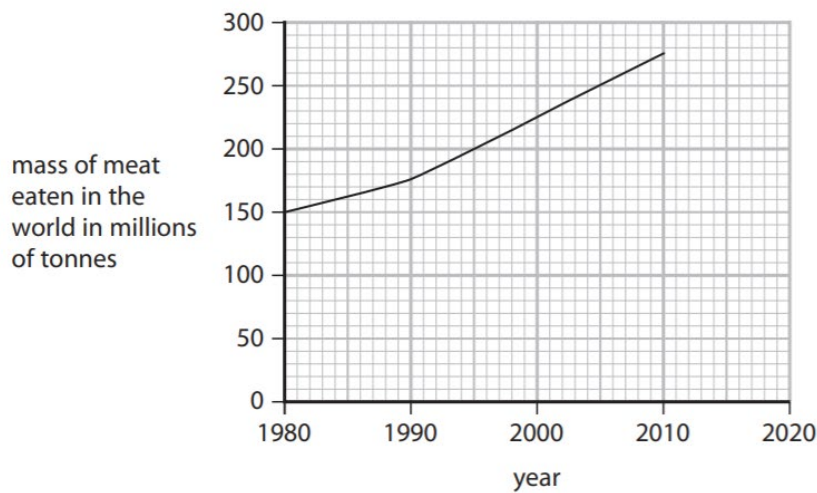


Figure 25

Calculate the rate of increase in the mass of meat eaten in the world from 2000 to 2010.

(2)

..... millions of tonnes per year

(d) Figure 26 shows an energy pyramid.

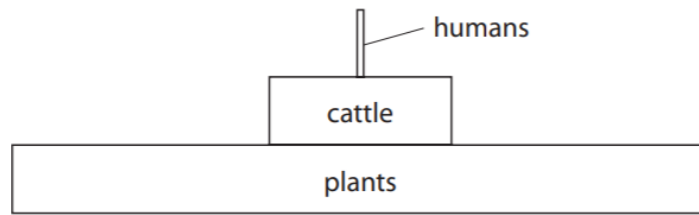


Figure 26

(i) Explain why the area labelled cattle is smaller than the area labelled plants.

(2)

.....

.....

.....

.....

.....

(ii) The World Health Organisation uses this definition of food security.

'When all people at all times have access to sufficient, safe, nutritious food to maintain a healthy and active life'

Explain how a large increase in the mass of meat eaten will decrease food security in the future.

(3)

.....

.....

.....

.....

.....

.....

.....

.....

.....

TOTAL = 115 MARKS